









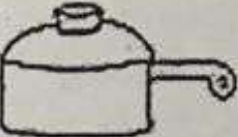






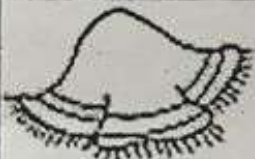


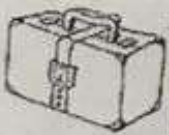









NOME: _____

PROFESSORA: _____

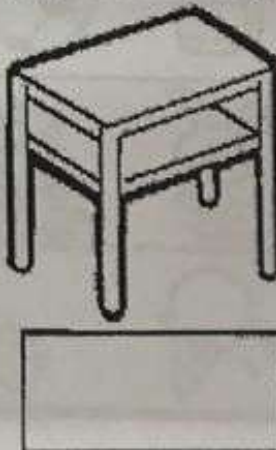

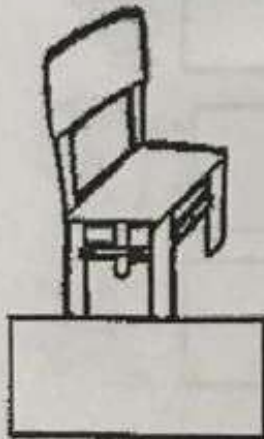
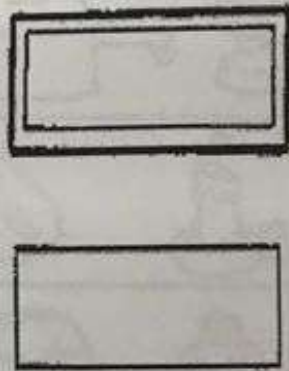
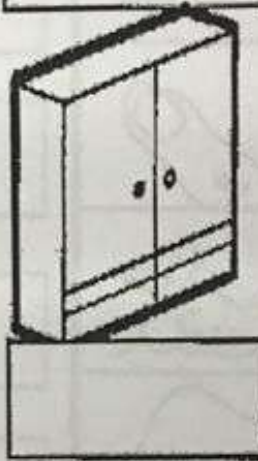
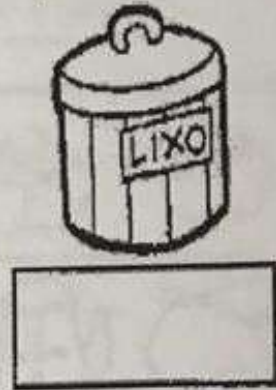
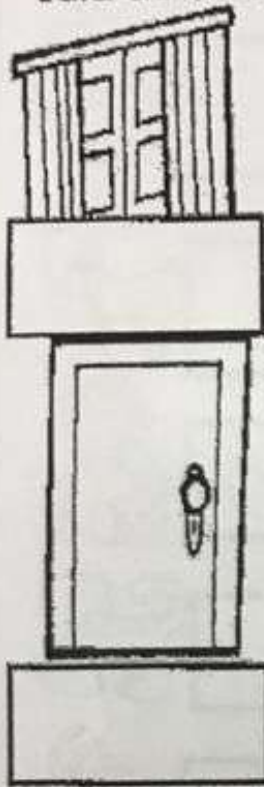
LIGUE CADA DESENHO A SUA RIMA.

	<input type="text"/>			
	<input type="text"/>			
	<input type="text"/>			
	<input type="text"/>			
	<input type="text"/>			
	<input type="text"/>			
	<input type="text"/>			

ESCREVA O NOME DE CADA FIGURA

DITADO RECORTADO

Recorte e cole os nomes dos objetos que temos na sala de aula.



ARMÁRIO JANELA CADEIRA MURAL
LIXEIRA PORTA QUADRO CARTEIRA
MESA

NOME: _____

DATA: 15 / 10 / _____

PESQUISE E ESCREVA O NOME DA FIGURA.




MARTELO
RÁDIO

PALHAÇO
SAIA

SABONETE
PÁSSARO

REMÉDIO
MAMÃO












SALA
PARAFUSO

RELÓGIO
MOSQUITO


SERROTE
MÁSCARA

ROBÔ
PERERECA


QUANTO FALTA PARA CHEGAR A 10?



DESENHE AS
PINTINHAS.



Nome: _____



MATEMÁTICA

– Complete de acordo com o indicado em cada coluna.

ANTES

40

12

32

51

19

23

ENTRE

10 12

19 21

51 53

9 11

60 62

59 61

DEPOIS

20

13

41

30

17

59





____° ANO _____ PROFESSORA(S): _____

SABIA QUE BRINCAR FAZ PARTE DO APRENDER?



BRINCADEIRA: O MACACO DISSE

REGRA: UMA PESSOA DÁ UMA ORDEM E AS DEMAIS A EXECUTAM.
POR EXEMPLO: FIQUE EM PÉ, PULE ALTO, BATA PALMAS, IMITE UM BICHO.
" O MACACO DISSE PARA FICAR EM PÉ"

TODOS DEVEM FICAR EM PÉ.

ESCOLHA QUEM IRÁ DAR AS ORDENS VOCÊ OU UMA PESSOAS DA SUA FAMÍLIA.

DIVIRTAM-SE

FAÇA O REGISTRO DA BRINCADEIRA. PODE SER COM FOTO OU DESENHO.

RESOLVA OS PROBLEMINHAS

✎ Manuel tem _____ carrinhos,
_____ bolas e _____ petecas.

Quantos brinquedos
Manoel tem?



_____ + _____ + _____ = _____

Agora responda:

Qual brinquedo Manoel tem mais?

Qual brinquedo Manoel tem menos?

✎ Se Manoel tivesse apenas carrinhos e bolas, quantos brinquedos ele teria?

✎ Se Manoel tivesse apenas carrinhos e petecas, quantos brinquedos ele teria?