
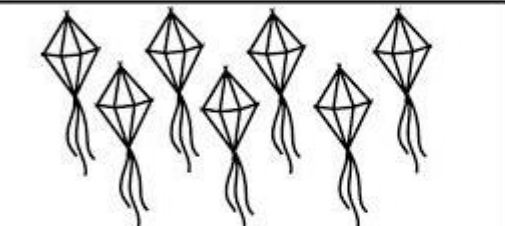
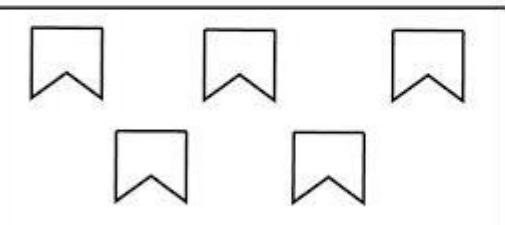



COLOQUE OS NÚMEROS QUE FALTAM, PRESTEM MUITA ATENÇÃO

	17		14		16		10	
9		11	18		20		13	
	19			5			18	
8		10		15		10		12
	16		12		14	7		9
17		19		13			19	
15		17		6		16		18

<https://www.atividadesparaimprimir.com/>

Conte quantos elementos tem em cada conjunto e pinte o quadrinho com o número correspondente.

	<table border="1"> <tr> <td>4</td><td>3</td></tr> <tr> <td>5</td><td>7</td></tr> </table>	4	3	5	7
4	3				
5	7				
	<table border="1"> <tr> <td>7</td><td>8</td></tr> <tr> <td>6</td><td>5</td></tr> </table>	7	8	6	5
7	8				
6	5				
	<table border="1"> <tr> <td>8</td><td>5</td></tr> <tr> <td>4</td><td>3</td></tr> </table>	8	5	4	3
8	5				
4	3				
	<table border="1"> <tr> <td>2</td><td>8</td></tr> <tr> <td>7</td><td>9</td></tr> </table>	2	8	7	9
2	8				
7	9				

VAMOS CALCULAR!

$5+4=$

$3+4=$

$9-5=$

$6-2=$

$7+2=$

$6+2=$

$8-3=$

$7-4=$

$5-2=$

$4+4=$

